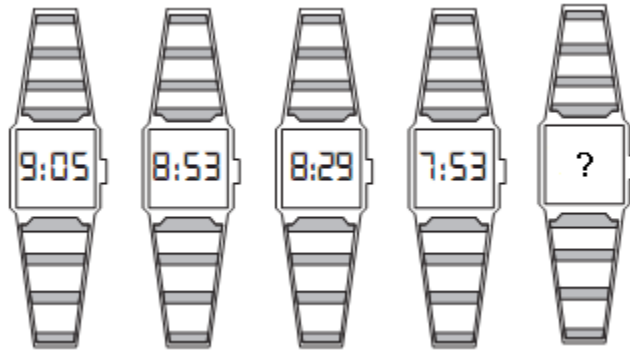



1. What time should last watch show?

ANS: 7.05



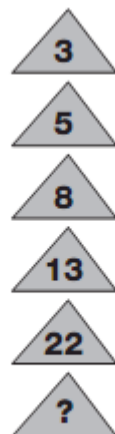
What time should last watch show?



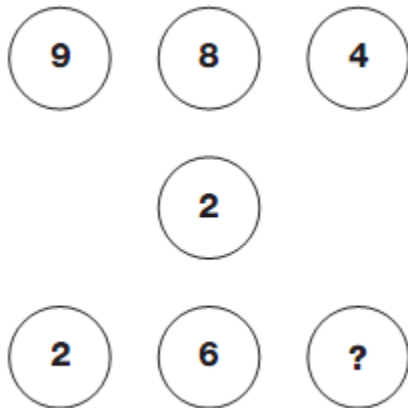
ANS: 6.06

Which number replaces the question mark?

ANS: 39



Which number replaces the question mark?



ANS: 7

Choose the alternative which is closely resembles the mirror image of the given combination.

BRISK

(1) **KSIRB**

(2) **KZIRB**

(3) **KZIRB**

(4) **BRISK**

ANS : 4

Choose the alternative which is closely resembles the mirror image of the given combination.

MALAYALAM

(1) **MALAYALAM**

(2) **MAJAYAJAM**

(3) **MAJAYAJAM**

(4) **MAJAYAJAM**

ANS: 2

Identify the figure that completes the pattern



ANS: 3

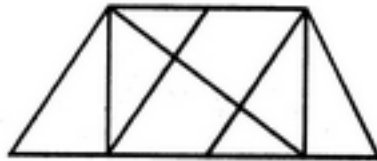
Identify the figure that completes the pattern



ANS: 2

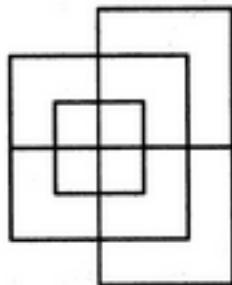
Find the number of triangles in the given figure.

ANS: 14



Find the minimum number of straight lines required to make the given figure.

ANS: 13



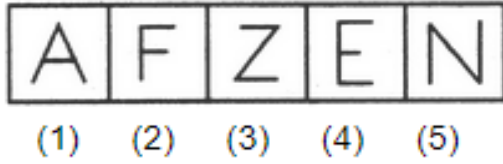
Choose the figure which is different from the rest.

ANS : 1



Choose the figure which is different from the rest.

ANS: 4



Can you identify this Logo? Which Bank is this?



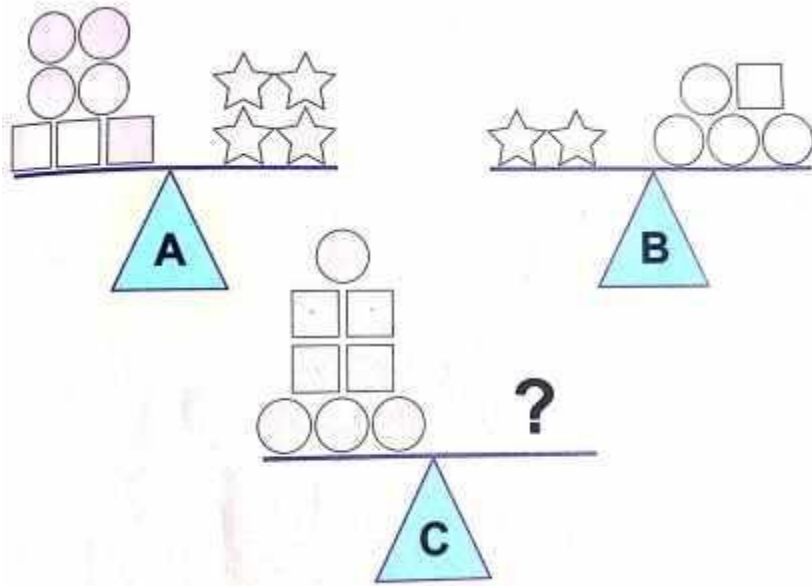
ANS: IDBI Bank

Can you identify this Logo? Which Bank is this?



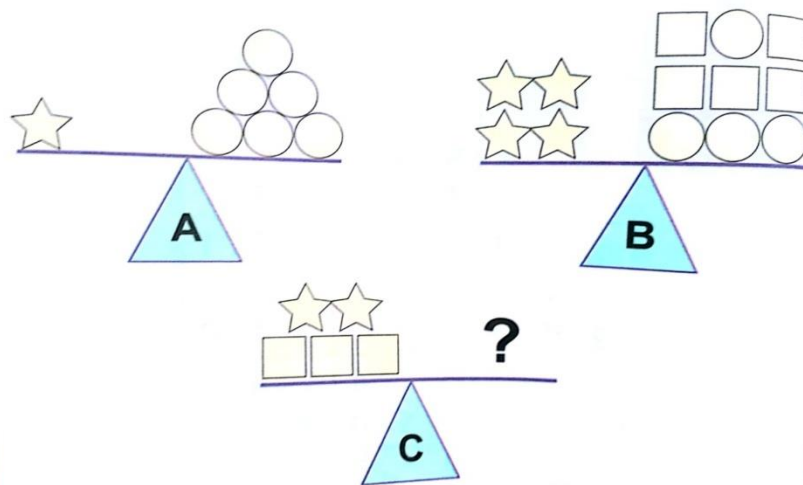
ANS : Syndicate Bank

1. How many circles are needed to balance scale?



Ans: 28

2. How many circles are needed to balance C



ANS : 24

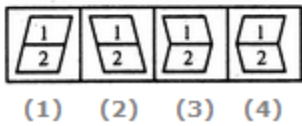

Find out the unmatched. ZOA, YPB, XQC, WDR.

Ans: WDR

Find out the unmatched AZL, CYN, EPV, FTR

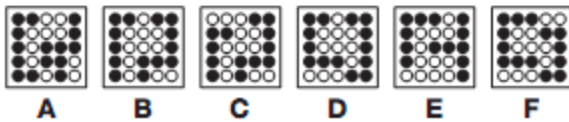
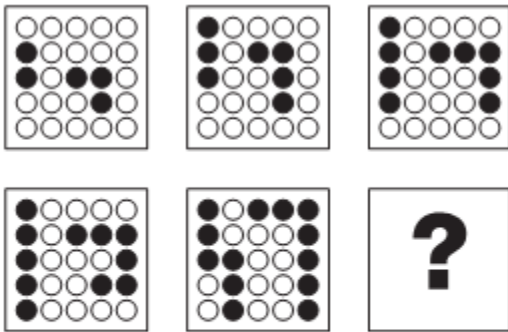
Ans: EPV

Select a suitable figure from the four alternatives that would complete the figure



Ans: 3

2. Which grid replaces the question mark?



Ans: A